










SUBJECT NAME -MATH

GRADE- 1

WORKSHEET

Unit -2
Numbers 1 to 10

I. Count and fill in the blanks with the number.

		
<input type="text"/>	<input type="text"/>	<input type="text"/>
		
<input type="text"/>	<input type="text"/>	<input type="text"/>
		
<input type="text"/>	<input type="text"/>	<input type="text"/>



II. write the number names.

- a. 1-
- b. 7-
- c. 9-
- d. 5-

III. Fill in the blanks with '>', '<' or '='.

1) $2 \square 1$

2) $7 \square 4$

3) $2 \square 3$

4) $8 \square 8$

IV. Choose the correct answer(s).

1. Number that come one before 6

- a) 7 b) 8 c) 9 d) 2

2. Number that come one after 2

- a) 2 b) 10 c) 1 d) 7

3. Number(s) that come between 2 and 5

- a) 4 b) 1 c) 7 d) 5

V, Draw a picture of two trees and four butterflies